

June 09 FP2

1. (a) Express $\frac{1}{r(r+2)}$ in partial fractions.

(1)

(b) Hence show that $\sum_{r=1}^n \frac{4}{r(r+2)} = \frac{n(3n+5)}{(n+1)(n+2)}$.

(5)

a) $\frac{1}{r(r+2)} = \frac{A}{r} + \frac{B}{r+2} \Rightarrow 1 = A(r+2) + B(r) \quad r=0 \Rightarrow A = \frac{1}{2}$
 $r = -2 \Rightarrow B = -\frac{1}{2}$

$$= \frac{1}{2r} - \frac{1}{2(r+2)}$$

b) $\sum_1^n \frac{4}{r(r+2)} = 4 \sum_1^n \frac{1}{r(r+2)}$

$r=1 \quad \left(\frac{1}{2} - \frac{1}{6}\right)_+ \quad r=n-2 \quad \left(\frac{1}{2(n-2)} - \frac{1}{2n}\right)_+$

$r=2 \quad \left(\frac{1}{4} - \frac{1}{8}\right)_+ \quad r=n-1 \quad \left(\frac{1}{2(n-1)} - \frac{1}{2(n+1)}\right)_+$

$r=3 \quad \left(\frac{1}{6} - \frac{1}{10}\right)_+ \quad r=n \quad \left(\frac{1}{2n} - \frac{1}{2(n+2)}\right)$

$r=4 \quad \left(\frac{1}{8} - \frac{1}{12}\right)_+$

$$\therefore 4 \sum_1^n \frac{1}{r(r+2)} = 4 \left[\frac{3}{4} - \frac{1}{2(n+1)} - \frac{1}{2(n+2)} \right]$$

$$= 4 \left[\frac{3(n+1)(n+2) - 2(n+2) - 2(n+1)}{4(n+1)(n+2)} \right]$$

$$= \frac{3n^2 + 9n + 6 - 2n - 4 - 2n - 2}{(n+1)(n+2)} = \frac{n(3n+5)}{(n+1)(n+2)}$$

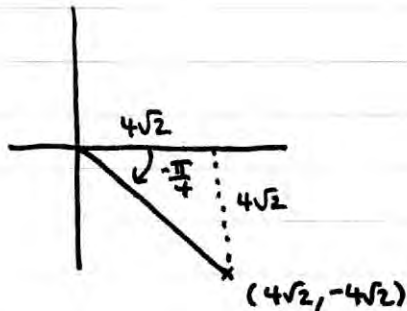
★

2. Solve the equation

$$z^3 = 4\sqrt{2} - 4\sqrt{2}i,$$

giving your answers in the form $r(\cos \theta + i \sin \theta)$, where $-\pi < \theta \leq \pi$.

(6)



$$r = \sqrt{(4\sqrt{2})^2 + (4\sqrt{2})^2} = 8$$

$$\therefore z^3 = 8 \left(\cos \frac{-\pi}{4} + i \sin \frac{-\pi}{4} \right)$$

$$\Rightarrow z = 2 \left(\cos \left(\frac{-\pi}{4} + 2k\pi \right) + i \sin \left(\frac{-\pi}{4} + 2k\pi \right) \right)^{\frac{1}{3}}$$

$$\Rightarrow z = 2 \left[\cos \left(\frac{8k-1}{4} \pi \right) + i \sin \left(\frac{8k-1}{4} \pi \right) \right]^{\frac{1}{3}}$$

$$\Rightarrow z = 2 \left[\cos \left(\frac{8k-1}{12} \pi \right) + i \sin \left(\frac{8k-1}{12} \pi \right) \right]$$

$$k = -1 \quad z = 2 \left[\cos \frac{-9\pi}{12} + i \sin \frac{-9\pi}{12} \right]$$

$$k = 0 \quad z = 2 \left[\cos \frac{-\pi}{12} + i \sin \frac{-\pi}{12} \right]$$

$$k = 1 \quad z = 2 \left[\cos \frac{7\pi}{12} + i \sin \frac{7\pi}{12} \right]$$

3. Find the general solution of the differential equation

$$\sin x \frac{dy}{dx} - y \cos x = \sin 2x \sin x,$$

giving your answer in the form $y = f(x)$.

(8)

$$\frac{dy}{dx} - \left(\frac{\cos x}{\sin x}\right)y = \sin 2x \Rightarrow \frac{dy}{dx} - (\cot x)y = \sin 2x$$

$$\text{IF } f(x) = e^{-\int \cot x dx} = e^{-\ln|\sin x|} = (e^{\ln|\sin x|})^{-1} = (\sin x)^{-1} = \operatorname{cosec} x$$

$$\Rightarrow \operatorname{cosec} x \frac{dy}{dx} - (\operatorname{cosec} x \cot x)y = \sin 2x \operatorname{cosec} x$$

$$\Rightarrow \frac{d}{dx}(y \operatorname{cosec} x) = \frac{2 \sin x \cos x}{\sin x} \Rightarrow y \operatorname{cosec} x = 2 \int \cos x dx$$

$$\Rightarrow y = \frac{2 \sin x + c}{\operatorname{cosec} x} \Rightarrow y = \frac{2 \sin^2 x + c \sin x}{2}$$

4.

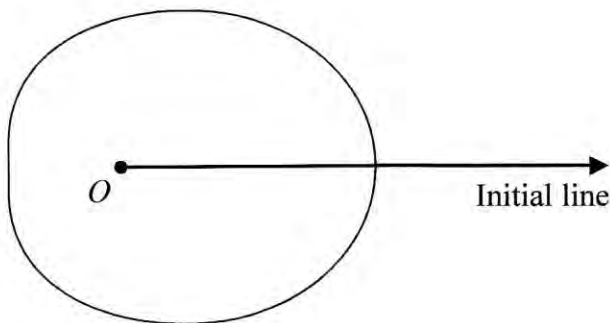


Figure 1

Figure 1 shows a sketch of the curve with polar equation

$$r = a + 3 \cos \theta, \quad a > 0, \quad 0 \leq \theta < 2\pi$$

The area enclosed by the curve is $\frac{107}{2} \pi$.

Find the value of a .

(8)

$$\text{Area} = 2 \times \frac{1}{2} \int_0^{\pi} (a + 3 \cos \theta)^2 d\theta = \int_0^{\pi} a^2 + 6a \cos \theta + 9 \cos^2 \theta d\theta$$

$$\cos 2\theta = 2 \cos^2 \theta - 1 \Rightarrow \frac{9}{2} \cos 2\theta + \frac{9}{2} = 9 \cos^2 \theta$$

$$\int_0^{\pi} a^2 + 6a \cos \theta + \frac{9}{2} \cos 2\theta + \frac{9}{2} d\theta = \int_0^{\pi} \left(a^2 + \frac{9}{2} \right) + 6a \cos \theta + \frac{9}{2} \cos 2\theta d\theta$$

$$= \left[\left(a^2 + \frac{9}{2} \right) \theta + 6a \sin \theta + \frac{9}{4} \sin 2\theta \right]_0^{\pi} = \left(a^2 + \frac{9}{2} \right) \pi = \left(\frac{2a^2 + 9}{2} \right) \pi$$

$$\therefore \frac{2a^2 + 9}{2} = \frac{107}{2} \Rightarrow 2a^2 = 98 \Rightarrow a^2 = 49 \quad \therefore \underline{a = 7}$$

5.

$$y = \sec^2 x$$

(a) Show that $\frac{d^2 y}{dx^2} = 6\sec^4 x - 4\sec^2 x$.

(4)

(b) Find a Taylor series expansion of $\sec^2 x$ in ascending powers of $\left(x - \frac{\pi}{4}\right)$, up to and including the term in $\left(x - \frac{\pi}{4}\right)^3$.

(6)

$$y = (\sec x)^2$$

$$y' = 2(\sec x)' \times \sec x \tan x = 2\sec^2 x \tan x$$

$$y'' = 4(\sec x)' \sec x \tan^2 x + 2\sec^4 x = 4\sec^2 x \tan^2 x + 2\sec^4 x$$

$$\frac{\sin^2 x + \cos^2 x}{\cos^2 x} = \frac{1}{\cos^2 x} \Rightarrow \tan^2 x + 1 = \sec^2 x$$

$$y'' = 4\sec^2 x (\sec^2 x - 1) + 2\sec^4 x = 6\sec^4 x - 4\sec^2 x$$

$$y''' = 24\sec^4 x \tan x - 8\sec^2 x \tan x$$

$$y\left(\frac{\pi}{4}\right) = \frac{1}{\left(\cos\left(\frac{\pi}{4}\right)\right)^2} = (\sqrt{2})^2 = 2$$

$$y'\left(\frac{\pi}{4}\right) = 2(\sqrt{2})^2(1) = 4$$

$$y''\left(\frac{\pi}{4}\right) = 4(\sqrt{2})^2(1)^2 + 2(\sqrt{2})^4 = 8 + 8 = 16$$

$$y'''\left(\frac{\pi}{4}\right) = 24(\sqrt{2})^4(1) - 8(\sqrt{2})^2(1) = 96 - 16 = 80$$

$$\therefore y = 2 + 4\left(x - \frac{\pi}{4}\right) + 8\left(x - \frac{\pi}{4}\right)^2 + \frac{80}{3}\left(x - \frac{\pi}{4}\right)^3$$

6. A transformation T from the z -plane to the w -plane is given by

$$w = \frac{z}{z+i}, \quad z \neq -i$$

The circle with equation $|z|=3$ is mapped by T onto the curve C .

(a) Show that C is a circle and find its centre and radius.

(8)

The region $|z|<3$ in the z -plane is mapped by T onto the region R in the w -plane.

(b) Shade the region R on an Argand diagram.

(2)

$$wz + iw = z \Rightarrow z - wz = iw \Rightarrow |z|(1-w) = |iw|$$

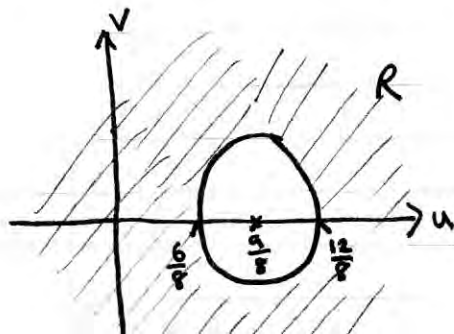
$$\Rightarrow 3|w-1| = |i/w| \Rightarrow 3|(u-1)+iv| = |u+iv|$$

$$\Rightarrow 9[(u-1)^2 + v^2] = u^2 + v^2 \Rightarrow 9u^2 - 18u + 9 + 9v^2 = u^2 + v^2$$

$$\Rightarrow 8u^2 - 18u + 8v^2 = -9 \Rightarrow u^2 - \frac{9}{4}u + v^2 = -\frac{9}{8}$$

$$\Rightarrow \left(u - \frac{9}{8}\right)^2 + v^2 = -\frac{9}{8} + \frac{81}{64} = \frac{9}{64} \quad \text{Circle } C\left(\frac{9}{8}, 0\right) \quad r = \frac{3}{8}$$

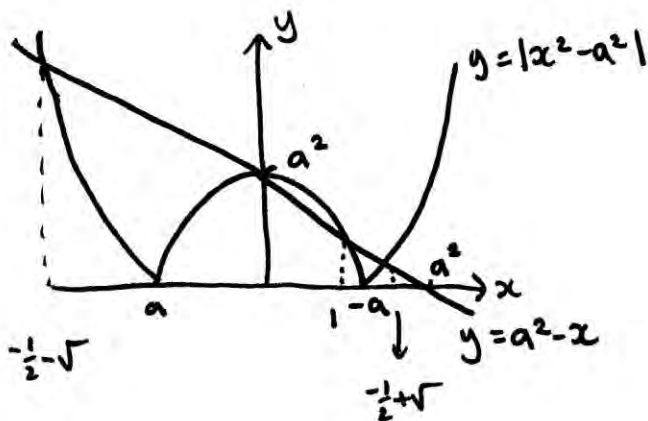
b)



7. (a) Sketch the graph of $y = |x^2 - a^2|$, where $a > 1$, showing the coordinates of the points where the graph meets the axes. (2)

(b) Solve $|x^2 - a^2| = a^2 - x$, $a > 1$. (6)

(c) Find the set of values of x for which $|x^2 - a^2| > a^2 - x$, $a > 1$. (4)



$$\begin{aligned} x^2 - a^2 &= a^2 - x \\ x^2 + x - 2a^2 &= 0 \\ \left(x + \frac{1}{2}\right)^2 &= 2a^2 + \frac{1}{4} \\ x + \frac{1}{2} &= \pm \sqrt{2a^2 + \frac{1}{4}} \\ x &= -\frac{1}{2} \pm \sqrt{2a^2 + \frac{1}{4}} \end{aligned}$$

$$\begin{aligned} x^2 - a^2 &= x - a^2 \\ x^2 - x &= 0 \\ x(x - 1) &= 0 \\ \underline{x=0} \quad \underline{x=1} \end{aligned}$$

$$x < -\frac{1}{2} - \sqrt{2a^2 + \frac{1}{4}}$$

or

$$0 < x < 1$$

or

$$x > -\frac{1}{2} + \sqrt{2a^2 + \frac{1}{4}}$$

8.

$$\frac{d^2x}{dt^2} + 5\frac{dx}{dt} + 6x = 2e^{-t}$$

Given that $x = 0$ and $\frac{dx}{dt} = 2$ at $t = 0$,

(a) find x in terms of t .

(8)

The solution to part (a) is used to represent the motion of a particle P on the x -axis. At time t seconds, where $t > 0$, P is x metres from the origin O .

(b) Show that the maximum distance between O and P is $\frac{2\sqrt{3}}{9}$ m and justify that this distance is a maximum.

(7)

$$\begin{aligned} x &= Ae^{mt} & x'' + 5x' + 6x &= 0 \\ x' &= Ame^{mt} & Ae^{mt}(m^2 + 5m + 6) &= 0 \\ x'' &= Am^2e^{mt} & \neq 0 & \Rightarrow (m+3)(m+2) = 0 \\ & & & m = -3 \quad m = -2 \end{aligned}$$

$$\therefore x_{CF} = Ae^{-2t} + Be^{-3t}$$

$$\begin{aligned} x &= \lambda e^{-t} & x'' + 5x' + 6x &= 2e^{-t} \\ x' &= -\lambda e^{-t} & \lambda e^{-t} - 5\lambda e^{-t} + 6\lambda e^{-t} &= 2e^{-t} \\ x'' &= \lambda e^{-t} & 2\lambda e^{-t} &= 2e^{-t} \quad \therefore \lambda = 1 \end{aligned}$$

$$x_{PI} = e^{-t} \quad \therefore x = Ae^{-2t} + Be^{-3t} + e^{-t}$$

$$x=0, t=0 \quad \Rightarrow \quad 0 = A + B + 1 \quad \Rightarrow \quad A + B = -1$$

$$x' = -2Ae^{-2t} - 3Be^{-3t} - e^{-t}$$

$$\begin{aligned} x=0, x'=2, t=0 &\Rightarrow 2 = -2A - 3B - 1 \Rightarrow \begin{aligned} 2A + 3B &= -3 \\ 2A + 2B &= -2 \end{aligned} \\ &\quad \underline{\quad \quad \quad} \\ &\quad \quad \quad B = -1 \quad A = 0 \end{aligned}$$

$$\therefore x = e^{-t} - e^{-3t}$$


$$\begin{aligned} \text{b) max distance when } x' &= 0 \quad x' = 3e^{-3t} - e^{-t} \Rightarrow 3e^{-3t} = e^{-t} \\ \Rightarrow 3 &= \frac{e^{-t}}{e^{-3t}} \Rightarrow 3 = e^{2t} \Rightarrow \ln 3 = 2t \Rightarrow t = \frac{1}{2} \ln 3 \quad \therefore t = \ln \sqrt{3} \end{aligned}$$

$$x_{\max} = e^{-\ln \sqrt{3}} - e^{-3 \ln \sqrt{3}} = (e^{\ln \sqrt{3}})^{-1} - (e^{\ln \sqrt{3}})^{-3} = \frac{1}{\sqrt{3}} - \left(\frac{1}{\sqrt{3}}\right)^3$$

$$= \frac{1}{\sqrt{3}} - \frac{1}{3\sqrt{3}} = \frac{3-1}{3\sqrt{3}} = \frac{2}{3\sqrt{3}} = \frac{2\sqrt{3}}{9}$$

$$x'' = e^{-t} - 9e^{-3t} \quad t = \ln\sqrt{3}$$

$$x'' = (e^{\ln\sqrt{3}})^{-1} - 9(e^{\ln\sqrt{3}})^{-3} = \frac{1}{\sqrt{3}} - \frac{9}{3\sqrt{3}} = -\frac{6}{3\sqrt{3}}$$

$\therefore x'' < 0$  $\Rightarrow x$ is a maximum 